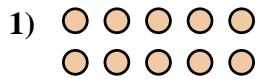
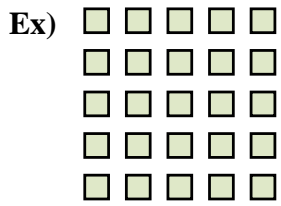




Write each array as an addition problem and solve.



Answers

Ex. 5+5+5+5+5=25

1. _____

2. _____

3. _____

4. _____

5. _____

6. _____

7. _____

8. _____

9. _____

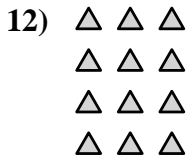

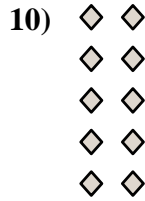





10. _____

11. _____

12. _____

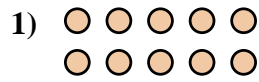
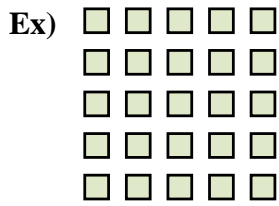
13. _____

14. _____





Write each array as an addition problem and solve.



Answers

Ex. 5+5+5+5+5=25

1. 5+5=10

2. 2+2+2=6

3. 5+5+5=15

4. 3+3+3=9

5. 3+3=6

6. 2+2+2+2=8

7. 4+4+4=12

8. 4+4+4+4+4=20

9. 3+3+3+3+3=15

10. 2+2+2+2+2=10

11. 5+5+5+5=20

12. 3+3+3+3=12

13. 4+4+4+4=16

14. 4+4=8

